

EMMANUEL MISSION SR SEC SCHOOL, BEAWAR
ONLINE CLASSES
WEEK – 34 (26.10.2020)
CLASS – V

English: Kindly see below

Hindi: <https://youtu.be/enMADotuTic>

Mathematics: <https://youtu.be/59fLenbo0Zc>

General Science: Kindly see below

Social Studies: Kindly see below

Computer Science: Kindly see below

General Knowledge: <https://youtu.be/X6oWh0hnKks>

Moral Science: Kindly see below

Physical Education: https://youtu.be/Utu2GO9_bDI

Music (Guitar): <https://youtu.be/2UkNFOgy6JU>

Music (Keyboard): <https://youtu.be/Xui8-v16o7A>

Health & Sanitation: https://youtu.be/u_fz-6AMNdA

Art Education: <https://youtu.be/4Yv-pF9o3-g>

EMMANUEL MISSION SR SEC SCHOOL, BEAWAR

ENGLISH – I

CLASS - V

Poem - Spring

Answer these questions:

Q.1 What is the central idea of the poem?

Ans. Celebrating the end of winter.

Q.2 What do you think is the speaker-an older or a younger person?

Ans. The speaker was a younger person because normally children don't like staying indoors wearing woollen clothes during winter. Spring means that they were free to run and play.

Q.3 The speaker knows what season it is by noticing the signs around him /her. Name five such signs?

Ans. There were buzzing black bees, there was dew on the rose, a rabbit has come out of its hiding place, the freshwater eels appear, the speaker is able to go out without a coat, there were buds and flowers and doves on trees.

Q.4 Why does the speaker say she is racing through the meadows without a coat? What does it signify?

Ans. The speaker is able to step out of the house without a coat. This means that winter is finally over and it is spring.

Q.5 The word 'I'm is a refrain (a word that gets repeated) in the poem. It is used in two ways. Describe them. What do you think is the effect in this repetition?

Ans. In the beginning of the poem, the speaker uses the word 'I am 'to personify things like the sun, moon, dew, rabbit, etc. In the next lines she uses the word 'I'm to convey feelings and actions like lovely, lively, racing etc.

Q.6 How do the words racing through the meadows or running on the rooftops reflect spring?

Ans. The words racing through the meadows or running on the rooftops show freedom, happiness and lightness. These feelings convey the joy of spring season after a dull, heavy winter.

Words in use. (Page no-52)

1. List the rhyming words in the poem.(Trees-bees), (heels-eels), (rose-nose), (coat -goat)

2. Here are some words from the poem. Change their forms so that they become verbs, or nouns as indicated.

a. wing (noun)	<u>winging</u>	(verb)
b. buzz (noun)	<u>Buzzing</u>	(verb)
c. <u>song</u> (noun)	singing	(verb)
d. <u>swing</u> (noun)	swinging	(verb)
e. race (noun)	<u>racing</u>	(verb)

EMMANUEL MISSION SR SEC SCHOOL, BEAWAR

SCIENCE

CLASS - V

Self Assessment

Chapter 1 :- food and health

(A) Tick the correct answers

1. A disease caused due to the lack of one or more nutrients is called a

(a) deficiency disease. (b) communicable disease

(b) imbalanced disease. (c) contact disease

2. Potato, bread, rice and chapati are rich sources of

(a) carbohydrates. (b) fats

(c) proteins. (c) water

(B) Fill in the blanks

1. pulses, eggs, milk, and soybean are rich sources of.....

2. sunlight is a good source of.....

(C) Circle the odd one out

1. cheese, butter, ghee, water, meat

2. bread, chapati, rice, fruit, potato

(D) Answer these questions

Q1 Why is junk food not good for us?

Q2 Why is it important to be healthy?

EMMANUEL MISSION SR SEC SCHOOL, BEAUSAR
SOCIAL STUDIES
CLASS - V
Assignment – XII
(Based On Chapter 1)

Marks : 10 MM

A. Tick the correct answers.

1. The Tropic of Cancer is located at
a. $23\frac{1}{2}^{\circ}$ N b. $23\frac{1}{2}^{\circ}$ S c. $66\frac{1}{2}^{\circ}$ N
2. The total number of meridians is
a. 360 b. 361 c. 362
3. The line of longitude which passes through Greenwich is called
a. Prime Meridian b. Tropic of Cancer c. Tropic of Capricorn

B. Fill in the blanks.

1. The Line of Longitude which passes through _____ in U.K. Is called the _____.
2. A globe can be easily rotated on a line called an _____.
3. _____ is an imaginary line that divides the Earth in two halves.

C. Write True or False.

1. The Prime Meridian also divides the Earth into two equal halves.
2. The Equator is the smallest longitude.
3. Inflatable globes are very handy.
4. The equator divides the Earth into two equal halves.

D. Answer these questions.

1. How does a grid help us?
2. Explain the meaning of 'Lines of Latitudes'.
3. Why do we need a globe?
4. How many types of globe are there?

EMMANUEL MISSION SR SEC SCHOOL, BEAWAR
COMPUTER
CLASS - V
Lesson- 7- Question Answers

Q1. Answer the following in 2-3 line.

Ans a: An algorithm is the set of instructions in the required order to obtain a solution of the problem.

Ans b: Flow chart is a pictorial representation of the sequence of steps to solve a particular problem.

It is helpful as we can draw flowchart first and then we can write program directly with the help of flowchart.

Ans c: The rules for writing an algorithm:

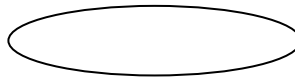
- (i) Give statement numbers as Step 1, Step 2 etc.
- (ii) Always begin with Start.
- (iii) Write each instruction in a separate line.

Ans d: Advantages of flowchart are:


- (i) It is usually easier to draw a flowchart of a problem and then to write a program.
- (ii) Flowchart is important in the development of the algorithms.
- (iii) It is easier to understand than a program.
- (iv) It is independent of any particular programming language.
- (v) It saves times in writing the program.

Ans e: The some of the symbols used in flowcharts are:

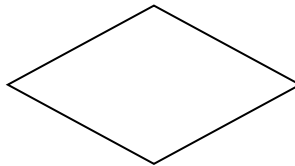
- (i) Terminal box: It is called START/STOP box. This is used to represent the beginning and end of the flowchart. It is an oval shaped box.



- (ii) Input/ Output box: The shape of this symbol is like a parallelogram. It is used to input command and print operation.



- (iii) Decision box: It is a diamond shaped box used to represent the conditions in a program.



Q2. Write (T) for True and (F) for False statements.

- (i) False (ii) True (iii) False (iv) True (v) True

Q3. Tick the correct answer.

Answers:

- a. (i)
- b. (iii)
- c. (i)
- d. (ii)

EMMANUEL MISSION SR SEC SCHOOL, BEAWAR

MORAL SCIENCE

CLASS : V

Assessment Ch.: 1 - Our Mentor And Saviour

A. Fill in the blanks :

1. We all are theof God.
2.is perfect in all respects.
3. God is

B. True or False.

1. We can empty a big ocean in to a tiny hole. ()
2. We should be kind. ()
3. Augustine was walking on the beach. ()

C. Answer these questions :

1. How does God take care of us at night ?
2. What did napoleon do when he saw the soldier sleeping.